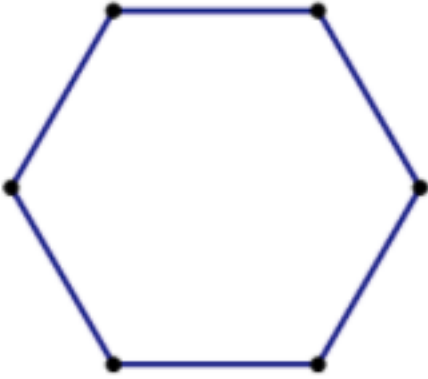


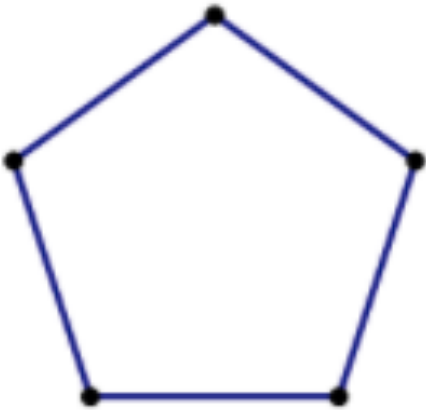
2G Practice

Find the area of each polygon. Don't forget proper units!

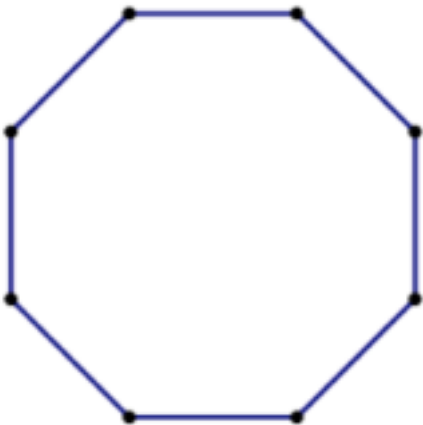
1.



2.



3.



Name _____ Date _____ Period _____

Simplify the following radicals!

1) $\sqrt{75}$

2) $\sqrt{16}$

3) $\sqrt{36}$

4) $\sqrt{64}$

5) $\sqrt{80}$

6) $\sqrt{30}$

7) $\sqrt{8}$

8) $\sqrt{18}$

9) $\sqrt{32}$

10) $\sqrt{12}$

11) $\sqrt{8}$

12) $\sqrt{108}$

13) $\sqrt{125}$

14) $\sqrt{50}$